

Name _____

more

Lesson 2-1

less than

Lesson 2-1

greater than

Lesson 2-1

fewer

Lesson 2-1

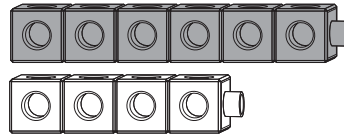


less than

2 is **less than** 4.

more

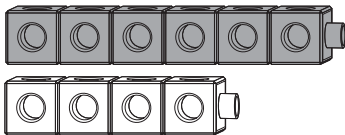
The group with a greater number of objects has **more**.



There are **more** gray cubes.

fewer

Use **fewer** to talk about having a lesser amount.



There are **fewer** white cubes.

greater than

4 is **greater than** 2.



Name _____

least

Lesson 2-2

greatest

Lesson 2-2

between

Lesson 2-2


before

Lesson 2-3



greatest


The number or group with the most value is the **greatest**.



23 is the **greatest**.

least

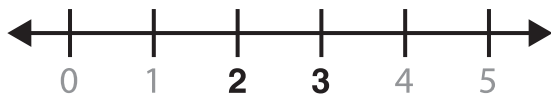
The number or group with the lowest value is the **least**.



7 is the **least**.

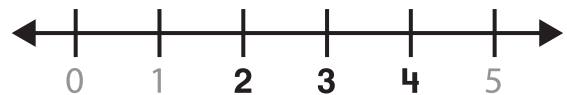
before

2 comes **before** 3 on a number line.



between

3 is **between** 2 and 4 on a number line.



Name _____

after

Lesson 2–3



Name _____

after

5 comes **after** 4
on a number line.

